


Notice how David:










- uses the same technique for locating the circle and the “7” inside the diamond

Practice

Practice describing the placement of the number “7” in each of the shapes above.

 **See and Draw**

Draw in the boxes what David and Michelle describe on the video. Do not stop the video until David or Michelle completes each description and draw from memory. View the descriptions again to fill in what you missed.

1. 	2. 	3. 
4. 	5. 	6. 
7. 	8. 	9. 

Answers are given in class.

Assignment

Practice the descriptions in boxes 1, 3, and 6. Be prepared to show them in class.